

Exam not valid for Paper Pencil Test Sessions

1 Which is true?


- A $3.48 > 3.35$
- B $0.601 > 0.623$
- C $8.052 > 8.499$
- D $1.38 > 1.93$

2 Which is NOT true?

- A $5.842 < 5.850$
- B $3.624 > 3.61$
- C $5.219 < 5.3$
- D $3.871 > 3.880$


3 Click on a box to choose each decimal you want to select. You must select all correct decimals.

The model is shaded to represent one whole.

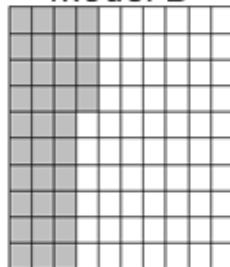


Identify all the decimals that are greater than model A but less than model B.

Model A



Model B



0.335	0.339
0.341	0.33

4 Directions: Click on the correct answers.

Which of these number statements are correct?

$0.87 < 0.82$

$0.66 > 0.64$

$0.75 < 0.72$

$0.8 > 0.4$

$0.9 < 0.5$

5 Click and drag the numbers to the correct box.

Order the decimals from least to greatest.

Least
0.009
0.9
0.91
1.0
Greatest

- 6 This table shows the time it took four students to complete a 40-meter race.

Race Times

Student	Time (in seconds)
Joel	13.07
Justin	13.6
Maria	13.06
Melinda	13.7

Which statement about these times is true?

- A $13.7 > 13.07$
 - B $13.07 > 13.6$
 - C $13.6 > 13.7$
 - D $13.06 > 13.07$
- 7 **Which number is greater than 1.52 and less than 1.7?**
- A 1.45
 - B 1.70
 - C 1.55
 - D 1.25

- 8 **Holly is practicing for a track meet. She records how far she runs each day. She made the following chart for the first week.**

Holly's Log	
Day	Distance in Miles
Monday	0.78
Tuesday	1.09
Wednesday	2
Thursday	0.8
Friday	1.2

Which of the following shows the distances in order from the shortest to the longest?

- A 0.78; 0.8; 1.2; 1.09; 2
- B 1.2; 1.09; 2; 0.8; 0.78
- C 2; 1.2; 1.09; 0.8; 0.78
- D 0.78; 0.8; 1.09; 1.2; 2

9 Which symbol makes the number sentence true?

5.479 ____ **5.759**

A =

B ÷

C >

D <

10 Which number goes in the blank to make the statement true?

6.462 > _____

A 6.472

B 6.5

C 6.624

D 6.426